

1) Zero-dimensional field theory of N-color "quarks"

fields "quarks" $\psi_k, \bar{\psi}^k$ (not fermionic)

"gluons" A_R^l $k, l = 1, 2, \dots, N$

action
$$S = -\frac{N}{2} \mu^2 A^2 + \bar{\psi} (gA - m) \psi$$


$$= -\frac{N}{2} \mu^2 \sum_{k,l=1}^N A_R^k A_l^k + \sum_{k,l=1}^N \bar{\psi}_k A_l^k \psi^l - m \sum_{k=1}^N \bar{\psi}_k \psi^k$$


path integral


$$Z[J, \eta, \bar{\eta}] = \int [dA d\bar{\psi} d\psi] e^{+S[A, \bar{\psi}, \psi] + J \cdot A + \bar{\eta} \cdot \eta + \bar{\eta} \cdot \psi}$$

Note: no space dependence, QFT at a single point, hence "zero-dimensional".

(a) derive Feynman rules:

"quark"  $= \frac{1}{m} \text{quark} \text{ propagator} = \frac{1}{m} \delta_k^l$

"gluon"  $= \frac{1}{N\mu^2} \text{gluon} \text{ propagator} = \frac{1}{N\mu^2}$

"quark-gluon vertex"  $= -g \text{quark-gluon vertex} = -g \delta_k^i \delta_i^j$

(warning: these might have errors - trust your own)

1, continued

(b) Integrate out $\bar{\psi}, \psi$. Write the path integral for the "quark" propagator in background "gluon" field

$$G_k^l = \text{diagram} = \frac{1}{Z} \int [dA] \left(\frac{1}{m - gA} \right)_k^l \dots$$
$$= \left\langle \frac{1}{m - gA} \right\rangle$$

(c) Use $O(N)$ symmetry to show that

$$G_k^l = \delta_k^l G$$

(d) Show that

$$\text{diagram} = \sum_{2n=0}^{\infty} \text{diagram with } n \text{ gluon lines}$$

(e) list all 1- and 2-gluon Feynman graphs (optionally also 3-gluon graphs), Draw them from now on in the upper-half plane (above the quark line)


(f) Evaluate them. (Simple; $\odot = \delta_{\ell}^{\ell} = N$)

(g) Which ones dominate for $N \rightarrow \infty$? Which ones are subdominant?

(h) Insert a gluon line in any allowable way into a planar diagram, which inserts are subdominant in $N \rightarrow \infty$ limit?

(i) which Feynman diagrams survive in $N \rightarrow \infty$ limit?

2) Planar field theory

Consider  Feynman diagrams that can be drawn in (upper-half) plane

Connected propagator $G = \text{---} \circ \text{---} = \frac{1}{\text{---} \circ \text{---}} = \frac{1}{m - \Sigma}$

1-P-I propagator: $\Sigma = \text{---} \circ \text{---}$

(a) show that for planar graphs in zero-dimensional case, problem 1

$$\Sigma = \text{---} \circ \text{---} = \text{---} \circ \text{---} = \frac{g^2}{\mu^2} G$$

(b) show that

$$G(m) = \frac{\mu^2}{2} \left(m - \sqrt{m^2 - \frac{4g^2}{\mu^2}} \right)$$

(c) explain why $+\sqrt{\dots}$ solution is not good

Remark: With substitution $m \rightarrow \text{energy } E$
 $gA \rightarrow \text{hamiltonian } H$

the resulting formula is a famous 1955 law used in nuclear physics, atomic physics, and condensed matter theory.

(d) bonus: what 1955 law??

Consider the matrix $\gamma^5 \stackrel{\text{def}}{=} i\gamma^0\gamma^1\gamma^2\gamma^3$.

problem 3).

(a) Show that γ^5 anticommutes with each of the γ^μ matrices, $\gamma^5\gamma^\mu = -\gamma^\mu\gamma^5$.

(b) Show that γ^5 is hermitian and that $(\gamma^5)^2 = 1$.

(c) Show that $\gamma^5 = (-i/24)\epsilon_{\kappa\lambda\mu\nu}\gamma^\kappa\gamma^\lambda\gamma^\mu\gamma^\nu$ and $\gamma^{[\kappa}\gamma^\lambda\gamma^\mu\gamma^\nu]} = -i\epsilon^{\kappa\lambda\mu\nu}\gamma^5$.

(d) Show that $\gamma^{[\lambda}\gamma^\mu\gamma^\nu]} = i\epsilon^{\kappa\lambda\mu\nu}\gamma_\kappa\gamma^5$.

(e) Show that any 4×4 matrix Γ is a unique linear combination of the following 16 matrices: 1 , γ^μ , $\gamma^{[\mu}\gamma^\nu]}$, $\gamma^5\gamma^\mu$ and γ^5 .

Conventions: $\epsilon^{0123} = +1$, $\epsilon_{0123} = -1$, $\gamma^{[\mu}\gamma^\nu]} = \frac{1}{2}(\gamma^\mu\gamma^\nu - \gamma^\nu\gamma^\mu)$,

$\gamma^{[\lambda}\gamma^\mu\gamma^\nu]} = \frac{1}{6}(\gamma^\lambda\gamma^\mu\gamma^\nu - \gamma^\lambda\gamma^\nu\gamma^\mu + \gamma^\mu\gamma^\nu\gamma^\lambda - \gamma^\mu\gamma^\lambda\gamma^\nu + \gamma^\nu\gamma^\lambda\gamma^\mu - \gamma^\nu\gamma^\mu\gamma^\lambda)$,

and ditto for the $\gamma^{[\kappa}\gamma^\lambda\gamma^\mu\gamma^\nu]}$.

next: problem 4).

Casimir energy Consider a massless real scalar field ϕ in two dimensions, confined to a box of length L with antiperiodic boundary conditions. This is, a field which satisfies $\phi(t, L) = -\phi(t, 0)$.

- (a) Find the Fourier mode expansion for the field ϕ .
- (b) Remember that the the Feynman Green's function for a field in flat space is given by

$$\langle 0|T(\phi(x)\phi(x'))|0 \rangle = G_F(x, x')_0 = \int d^2k \exp(ik(x-x'))/k^2 \times \left(\frac{1}{2\pi}\right)^2$$

Calculate $G_F(x, x')$ as a function of it's arguments.

- (c) For the case at hand with the given boundary conditions, a Feynmann Green's function is given by

$$G_F(x, x') = \sum_k \int dk^0 \exp(ik(x - x'))/k^2$$

where k runs over the allowed set of modes from the mode expansion. Show that this is equal to a sum over images

$$G_F(x, x') = \sum_{n=-\infty}^{\infty} (-1)^n G_F(x + nL, x')_0$$

of the Green's function for flat space.

- (d) Show that the Hamiltonian density in terms of the field ϕ is given by

$$\mathcal{H}(x, t) = \frac{1}{2} [\dot{\phi}(x, t)^2 + \phi_{,x}(x, t)^2]$$

- (e) Consider a point splitting Hamiltonian given by

$$\mathcal{H}(x, t)_\epsilon = \frac{1}{2} [\dot{\phi}(x, t)\dot{\phi}(x + \epsilon, t) + \phi_{,x}(x, t)\phi_{,x}(x + \epsilon, t)]$$

Calculate

$$\langle 0 | \mathcal{H}(x, t)_\epsilon | 0 \rangle$$

both for the theory in infinite space and in the theory with boundary conditions.

- (f) Show that the difference between the two results gives a finite result in the limit

$$\lim_{\epsilon \rightarrow 0} ([\mathcal{H}_\epsilon]_{box} - [\mathcal{H}_\epsilon]_{flat})$$

What is the final value?

Consider a theory of a single Dirac spinor with two kinds of mass terms,

problem 5)

$$\mathcal{L} = \frac{1}{2}(i\bar{\psi}\gamma^\mu\partial_\mu\psi - m\bar{\psi}\psi - im'\bar{\psi}\gamma_5\psi)$$

a) Show that the derivative term is invariant under the *chiral transformation*

$$\psi \rightarrow e^{i\alpha\gamma_5}\psi ,$$

for arbitrary constant α .

b) Use such a chiral transformation to transform the pseudo-scalar mass m' away. What is the mass of the resultant Dirac field?